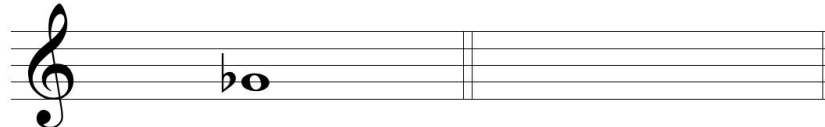


1. Pitch names

Treble clef

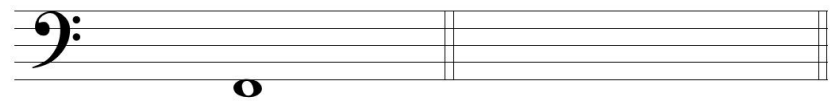
a) Write the name of the pitch b) Notate the given pitch



_____ d#

Bass Clef

c) Write the name of the pitch b) Notate the given pitch




_____ a#

2. Intervals

Treble clef


a) Name the noted interval (e.g m3, dim5) b) Note in the same manner the specified interval



_____ M3 (minor third) downwards

Bass clef

c) Name the noted interval (e.g m3, dim5) d) Note in the same manner the specified interval



_____ M7 (major seventh) upwards

3. Key signatures

Treble clef

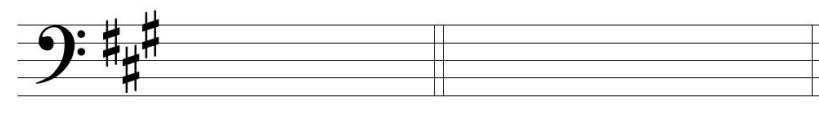
a) Identify the major key that has this key signature b) Write the key signature in F major



_____ -major

Bass clef

c) Identify the minor key that has this key signature d) Write the key signature in G minor



_____ -minor

4. Time signatures

Write in time signatures in the various measures (e.g. $\frac{2}{4}$ $\frac{6}{8}$)



5. Note values and rest symbols

a) Complete the measures with one note value so that the total note values correspond to the time signature

b) Complete the measures with one rest symbol so that the total note values correspond to the time signature



6. Chords

a) Provide the chord symbols for the noted chords on the line above the staff

b) Similarly, notate the specified chords

_____ _____ **Em7(b5)** **Gmaj7**