

KEY

1. Pitch names

Treble clef

- a) Write the name of the pitch b) Notate the given pitch



2. Intervals

Treble clef

- a) Name the noted interval (e.g m3, dim5) b) Note in the same manner the specified interval



3. Key signatures


Treble clef

- a) Identify the major key b) Write the key signature in F major




Bass Clef

- c) Write the name of the pitch b) Notate the given pitch




Bass clef

- c) Name the noted interval (e.g m3, dim5) d) Note in the same manner the specified interval



Bass clef

- c) Identify the minor key d) Write the key signature in G minor



KEY

4. Time signatures

Write in time signatures in the various measures (e.g. $\frac{2}{4}$ $\frac{6}{8}$)



5. Note values and rest symbols

a) Complete the measures with one note value so that the total note values correspond to the time signature

b) Complete the measures with one rest symbol so that the total note values correspond to the time signature



6. Chords

a) Provide the chord symbols for the noted chords on the line above the staff

b) Similarly, notate the specified chords

Chord symbols written above the staff:

- $B^b_m 7$
- D^{13}
- $Em7(b5)$
- $Gmaj7$